





Counting (1)

Name: _____

1. Count the trees and write down the number symbol and number name.

	Number symbol	Number name

2. How many crowns are there in each box? The first one has been done for you.

	6
	
	

3. Fill in the missing numbers.

5	6			9	10
---	---	--	--	---	----

2	4		8	10
---	---	--	---	----

10		8		6
----	--	---	--	---

6	5		3	2
---	---	--	---	---

4. Fill in the missing numbers. 10 ; _____ ; _____ ; _____ ; 6